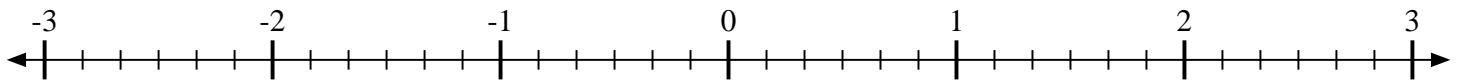
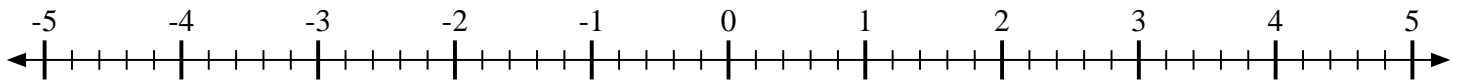


**Mark each location described.**

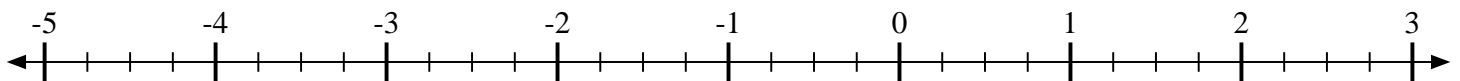
- 1) Mark the location of
- $1\frac{5}{6}$



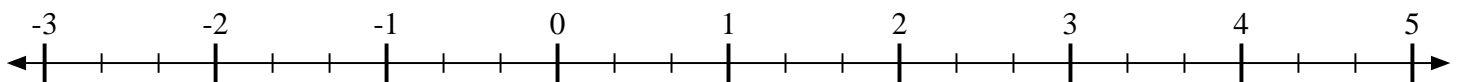
- 2) Mark the location of
- $-4\frac{4}{5}$



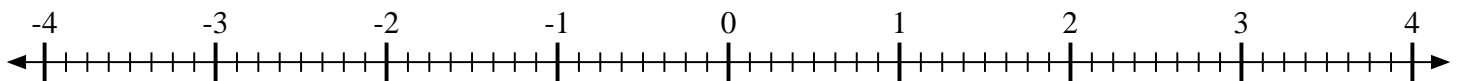
- 3) Mark the location of
- $2\frac{1}{4}$



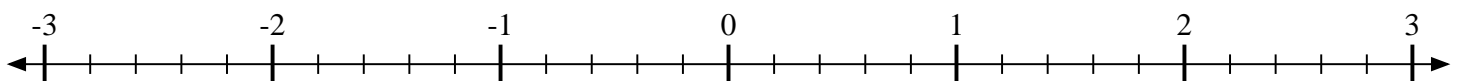
- 4) Mark the location of
- $-2\frac{1}{3}$



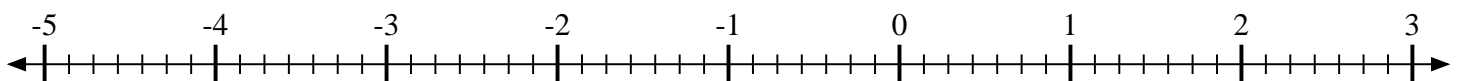
- 5) Mark the location of
- $-2\frac{1}{8}$



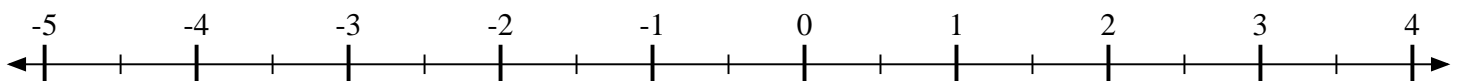
- 6) Mark the location of
- $-1\frac{2}{5}$



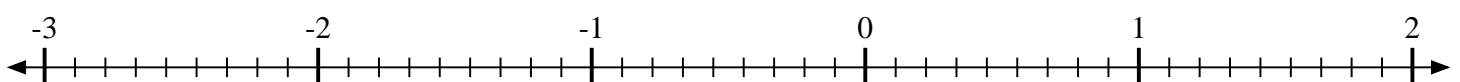
- 7) Mark the location of
- $-1\frac{4}{7}$



- 8) Mark the location of
- $3\frac{1}{2}$



- 9) Mark the location of
- $-2\frac{2}{9}$



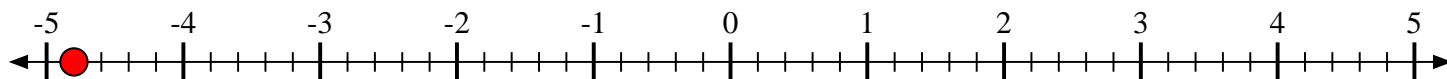


Mark each location described.

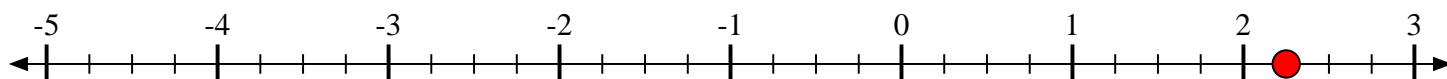
- 1) Mark the location of
- $1\frac{5}{6}$



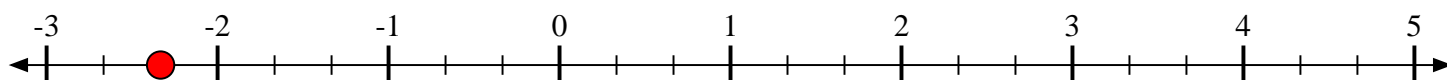
- 2) Mark the location of
- $-4\frac{4}{5}$



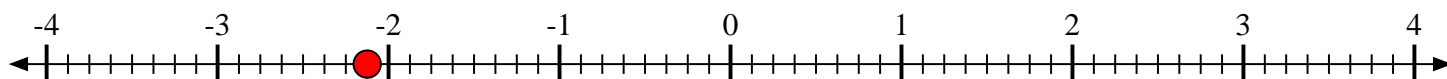
- 3) Mark the location of
- $2\frac{1}{4}$



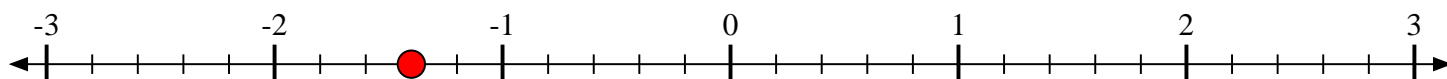
- 4) Mark the location of
- $-2\frac{1}{3}$



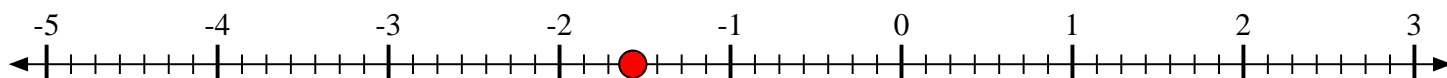
- 5) Mark the location of
- $-2\frac{1}{8}$



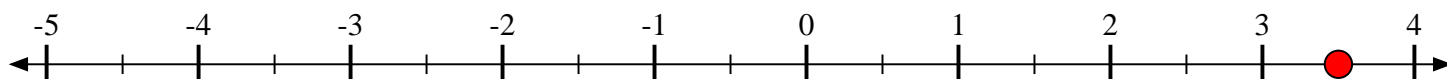
- 6) Mark the location of
- $-1\frac{2}{5}$



- 7) Mark the location of
- $-1\frac{4}{7}$



- 8) Mark the location of
- $3\frac{1}{2}$



- 9) Mark the location of
- $-2\frac{2}{9}$

